

**SOCIAL STUDIES Paper-1**  
**(English Medium)**

**Class: 10**

**Max. Marks: 50**

**Time: 2.45Hrs**

**Instructions:**

1. There are 4 Sections and 33 Questions in the paper.
2. Answers should be written in a given answer booklet.
3. There is internal choice in Section – IV only.
4. Write all the questions visible & legibly.
5. 15 minutes are given for reading the question paper and 2.30 hours given for answering The questions.

**Section - I**

**Note: 1. Answer all the Questions.**

**12 X ½ = 6**

**2. Each Question carries ½ Mark.**

1. Give an example to coarse cereals?
2. This is 100% organic farming state.

**A) Goa                      B) Sikkim                      C) Uttarakhand                      D) Manipur.**

3. Which Movement reflects in the given picture?



4. Match the following

<b>a) Infosys</b>	<b>i) Medicine</b>
<b>b) Ranbaxy</b>	<b>ii) I.T</b>
<b>c) Tata Motors</b>	<b>iii) Automobiles</b>

5. Find out the correct statement.

**i) Silent spring book was written by Rachel Carson**  
**ii) This book describe about the impact of endosulfan**

6. "If we lost our right over the forest then we will only get spades and pickaxes, Nothing else"

**Q: Who said this?**

7. Fill up the missing pair in the following.

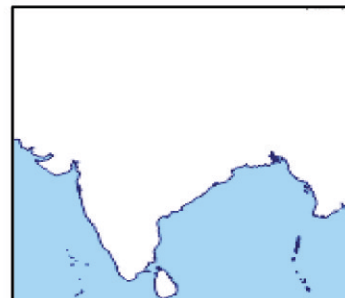
**i) Dharavi : Mumbai                      ii) Banjara hills: ?**

8. Expand the term NBA?

9. Correct the following sentence.

**'Mid day meals programme was first implemented in Kerala'**

10. Locate Kerala in the given map?



11. Who will get anthyodaya cards?

12. Odd one out from the following.

**a) Hyderabad                      b) Chennai                      c) Bhopal                      d) Ahmadabad**

## Section - II

**Note: 1. Answer all the Questions.  
2. Each Question carries 1 Mark**

**8 X1 = 8**

13. What are main aspects in Globalisation?  
14. "I saw many things. People ate grass, snakes. I lost my two sisters and a brother"  
Q: What does the statement resembles to us?  
15. Mention any two causes for the encouraging of organic farming in present context?  
16. Write any two slogans on to protect environment?



Write your caption in the context of environment?

18. What is minimum support price?  
19. What are the factors of productions?



20. What does the given map tells to us?

## Section - III

**Note: 1. Answer all the Questions.  
2. Each Question carries 2 Marks**

**8X 2=16**


21.

Daily Wages for different farm activities in Andhra Pradesh in December 2011 (in Rupees)								
Workers	Ploughing	Sowing	Weeding	Trans-planting	Harvesting	Winnowing	Threshing	Picking Cotton
Male	214	197	215	-	164	168	152	-
Female	-	152	130	143	126	124	118	136

Answer the following questions based on the given table.

- i) What are the works done only by female workers?  
ii) Why did the women are getting low wages than men?  
22. In what ways an MNC different from other companies?  
23. Explain the advantages of Multi Cropping?  
24. Draw the rough map of India and shade the areas of Bengal drought in 1943?

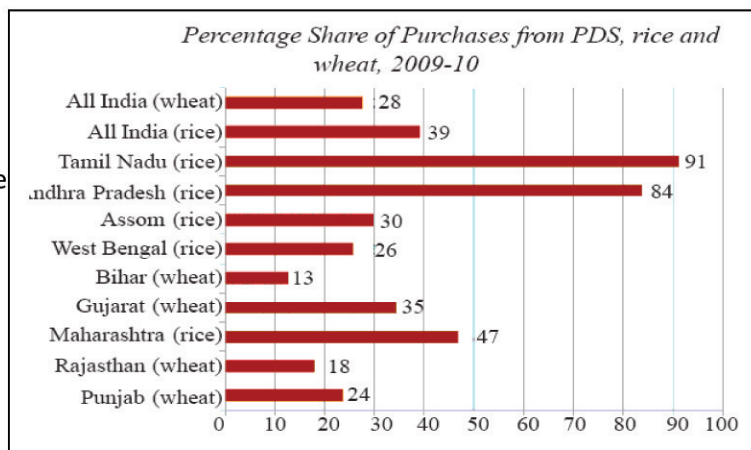
25. What do you understand from the given pyramid?



26. How the use of endosulfan had violated the right to life?  
 27. What do you understand by liberalisation of foreign trade?

28. Based on the given graph

- i) Which states are showing well performance in the functioning of P.D.S?  
 ii) Name the states that consuming wheat as their staple food?



#### Section - IV

5X 4=20

**Note:** 1. Answer all the Questions. 2. Each Question has internal choice  
 3. Each Question carries 4 marks.

29. The impact of globalisation has not been uniform. Explain it?

(Or)

Write about a non forming activity in your locality?

30. "The forest is our money lender and banker. In hard times we go to the forest.  
 We build our houses from it's wood"

**Q:** Are you agree with Bava Mahalia? If yes write your opinion on it?

(Or)

"Food security act of 2013 legalize the people's right to food. It implies to approximately 2/3 of population in our country. As per this law poor is entitled 5kg of food grains per month through P.D.S.

**Q:** Food security act is a boon to poor. Write your comment on it?

31. Make a poster on food security?

(Or)

"Environment is crucially important for the lives and livelihoods of the local communities and the lifestyles of local communities are harmonious with environment" Explain?

32. In what ways the Government have been trying to achieve the sustainable development?

(Or)

Rapid extraction of minerals and other natural resources would adversely impact the future development prospects. Do you agree?

33. Locate the following places in the out line map of India?

i) Chipco movement State

ii) Narmada dam

iii) Delhi

iv) The Head quarter of NIN

(Or)

i) Ford motors plant in Tamil Nadu

ii) The state that effected by endosulfan

iii) Bilaspur

iv) Assam